



Dear Parents and Girls,

We hope that you are all safe and well and that you had lots of opportunities to enjoy the wonderful sunshine over the last few days. This week is Week 11 so we are nearly at the end of the school year. We hope that you are enjoying reading the Yuckee Prince and we hope everyone got a copy in the post (please email us if you did not).

This week also you will hear a familiar voice explaining what to do . We hope it helps.

Thank you all again for your hard work, emails, pictures and more. It has been so great to see how everyone is getting on at home. I hope you all have a great week and we are here at

[3rd@stpatricksgirls.net](mailto:3rd@stpatricksgirls.net) if we can help with anything.

### Suggested Timetable

9.00-9.30 a.m. Exercise (JoeWicks live (Youtube) / Cosmic Yoga (Youtube)/ Go Noodle website

9.30-10.45 a.m. Work on the Core Subjects (English/Irish/Maths)

10.45-11 a.m. Small Break- Have a healthy snack and go outside for some fresh air!

11-12 noon RTÉ School Hub

12.00-12.45p.m. Project Work

12.45-1pm Lunch  
Free Time

We have suggested activities for English,  
Gaeilge and Maths here.... but all the  
teachers have worked together to give

you other suggestions you could do at  
home.

[Click here for Boredom Busters](#)

Week 11 Work June 8<sup>th</sup> -12<sup>th</sup> Ms Finn and Ms Linehan's 3<sup>rd</sup> Classes

[Click here for link to Joe Wicks PE classes](#) link to Joe Wicks the Body Coach an ideal way to start the day

[Keep up with your times tables here](#) multiplication practice (Hit the Button online game)

[Answer booklet to Work it out](#) (answers to WIO)

Try to keep a diary daily! It might become famous one day like Anne Frank's diary which she kept during World War 2.

## Monday

### English

**1. The Yuckee Prince:** Read Chapter 3. Continue with your Reader's Report Journal (diary). Write a summary (3 important pieces of information) and a prediction of what you think is going to happen in the next chapter.

**2. Reado:** Choose a Challenge! Don't forget to fill in the worksheet attached each time you complete a challenge!

### Maths


**1. Busy at Maths:** Capacity page 165 Q.1 & 2

**(Answers here)**


1. Read the measuring jug to answer these questions.

(a)  $1\text{ l} = 1000\text{ ml}$   
 (b)  $\frac{1}{2}\text{ l} = 500\text{ ml}$   
 (c)  $\frac{3}{4}\text{ l} = 750\text{ ml}$   
 (d)  $\frac{1}{4}\text{ l} = 250\text{ ml}$   
 (e) 50ml less than  $\frac{3}{4}\text{ l} = 700\text{ ml}$   
 (f) 200ml less than  $1\text{ l} = 800\text{ ml}$   
 (g) 150ml more than  $\frac{1}{4}\text{ l} = 400\text{ ml}$   
 (h) 300ml more than  $\frac{1}{2}\text{ l} = 800\text{ ml}$

When measuring amounts of liquid less than  $1\text{ l}$ , we use millilitres (ml).



**Challenge**




The total capacity of all 3 containers is  $1\text{ l}$ . If the jug holds 500ml, how much does each glass hold? 250 ml

STRAND: Measures STRAND UNIT/ELEMENT: Capacity LANGUAGE: Liter, containers, more than, about, less than, liquid, estimate, measure  $\frac{1}{2}$ ,  $\frac{3}{4}$ , total capacity

## 2. Hit the Button (online games) Practise $\times 2 \times 3$

### Gaeilge

[Click here to listen to Miss Finn reading the story](#)



**7.4 Éist leis agus léigh an scéal.**

An Mháirt atá ann.  
 Tá an múinteoir agus na páistí sa seomra ranga.  
 Tá na páistí go léir ag obair. Tá Béarla ar siúl acu.  
 Tá an múinteoir ina seasamh.

Níl Fionn ag obair. Níl a mhála scoile oscailte aige.  
 Níl aon leabhar ar a bhord.  
 'A Fhinn, cá bhfuil do leabhar?' arsa an múinteoir.  
 'Tá mo lámh gortaithe. Ní féidir liom scríobh,' arsa Fionn.  
 'Cad a tharla?' arsa an múinteoir.

'Ghortaigh mé mo lámh aréir. Bhí mé ag imirt sacair,' arsa Fionn.  
 Tá sé leathuair tar éis a dó dhéag anois. Buaileann an clog.  
 'Amach libh sa chlós agus bígí ag súgradh,' arsa an múinteoir.  
 'Níl cead agat dul amach, a Fhinn,' arsa an múinteoir.  
 'Tar liom go dtí an oifig.  
 Is féidir leat Matamaitic a dhéanamh.'  
 Bhí Fionn ar buile.  
 'Tá mo lámh ceart go leor anois,' arsa sé.

### **Freagair na ceisteanna.**

- 1 Cén lá atá ann?
- 2 Cad atá ar siúl ag an rang?
- 3 Cén fáth nach bhfuil Fionn ag obair?
- 4 Cad a bhuaileann ag leathuair tar éis a dó dhéag gach lá?
- 5 Cá bhfuil Fionn ag dul?
- 6 Cad atá le déanamh aige san oifig?

## Tuesday

### English

1. **The Yuckee Prince:** Read Chapter 4 pages 29-34.

Have a discussion on the character Witch Wendy. What words/adjectives describe her best?  
Draw Witch Wendy and write a paragraph describing her.

**Time to talk**  
Have a discussion about some of the characters we have met so far.

1. What words describe them best?
2. Draw the characters in each box below and write words that tell us more about them. You can use the list to help you.

spoilt   silly   enthusiastic   naughty   fed up   proud   mean  
frustrated   worried   excited   troublesome   unwise

The Yuckee Prince	Witch Wendy Way

2. **Reado:** Choose a Challenge! Don't forget to fill in the worksheet attached each time you complete a challenge!

### Maths

1. **Busy at Maths:** Capacity page 166 Questions 1, 2 & 3

(Answers here)

**Capacity – More millilitres and litres**

1. How much liquid is there in each jug?

(a) Smoothie 700 ml  
(b) Orange juice 250 ml  
(c) Water 500 ml  
(d) Blackcurrant 900 ml

(e) Which liquid is there least of? Orange Juice  
(f) Which liquid is there most of? Blackcurrant  
(g) What is the total measure of orange juice and water? 750 ml  
(h) How much more orange juice is needed to make 1 l of juice? 750 ml  
(i) How much less water is there than the smoothie? 200 ml

2. How many millilitres of liquid can each container hold? Estimate then measure to the nearest 50 millilitres. (Hint: A drop of water is about 1ml.)

Object	Estimate	Measure
(a) Cup		
(b) Egg cup		
(c) Bowl		
(d) Glass		
(e) Yogurt carton		

Fill each container in turn with water.  
Then pour the water into the measuring jug to find how much water it holds!

3. Which is best for measuring the capacity of the following: litres or millilitres?

(a) millilitres  
(b) litres  
(c) millilitres  
(d) litres

2. Hit the Button: (online game) Practise  $\times 4$   $\times 5$

### Gaeilge

[Listen to Miss Finn agus líon na bearnaí](#)

Grámaí: orm (mé) ort (tú) air (sé) uirthi (sí)  
brón tart deifir ocras tuirse eagla áthas

**Féach ar na pictiúir agus líon na bearnaí.**

Tá \_\_\_\_\_. (sé)  
 Tá \_\_\_\_\_. (sí)  
 Tá \_\_\_\_\_. (sé)  
 Tá \_\_\_\_\_. (sí)  
 Tá \_\_\_\_\_. (sé)  
 Tá \_\_\_\_\_. (sé)

If you would like to do extra work on "Mothucháon " here is a game you can play  
[http://www.schoolblog8.scoilnet.ie/feelings/playing\\_cards\\_mothuchain.pdf](http://www.schoolblog8.scoilnet.ie/feelings/playing_cards_mothuchain.pdf)

## Fun Wednesday

- 1) Are you interested in becoming a Plastic Free Ambassador?

[Become a plastic free Ambassador Click here](#)

- 2) Have a go at making a Cístín Cupáin - Mug Cake

[Click here to make a Mug Cake](#)

- 3) Gardening

Pull weeds

Water flowers

Plant new flowers

- 4) Television

RTE's School Hub

Favourite movie/ T.V programme

Nature programmes eg. David Attenborough's Blue Planet

- 5) Draw with Rob

Rob Biddulph is a great artist and he has fab videos on You Tube

[Click here to see one of Robs Videos and learn how to improve your drawing](#)

Free drawing

Mindfulness drawing

- 6) Games

Board games (eg. Scrabble, Articulate, Headbands...)

Cards (eg. Snap, Go Fish, Solitaire...)

Pen and paper games (eg. X's and O's, Stop the bus

Music games (eg. Karaoke, Musical statues.)

Outdoor games (eg. Obstacle course, football...)

- 7) Music

Learn to play an instrument or learn a new song

Listen to different genres or decades of music

Compose a song or piece of music

Strictly Come Dancing: Pick a song and prepare a dance rout

- 8) Watch these video on kindness.

Try a random act of kindness today.


<https://youtu.be/rwelE8yyY0U>

<https://youtu.be/GdYJr03eJjE>



10)

11)



Do you recognise these hilarious characters from the Lion King movie?? They sing a fantastic song called 'Hakuna Matata' which means no worries! It is a great song to sing along with it! Enjoy!

[Click here for Hakuma Matata](#)

## Thursday

### English

**1. The Yuckee Prince:** Continue reading Chapter 4 pages 35-40. Continue with your Reader's Report Journal (diary). Write a summary (3 important pieces of information) and a prediction of what you think is going to happen in the next chapter.

**3. Reado:** Choose a Challenge! Don't forget to fill in the worksheet attached each time you complete a challenge!

### Maths

**1. Hit the Button:** (online game) Practise  $\times 6$   $\times 7$

**2. Busy at Maths:** Capacity page 167

Q. 1 (Choose 2)

Q. 2

Q.3 (Choose 2)

Q.4

Q.5

(Challenge is optional)

**(Answers here)**

**subtraction** Thursday

Lucas poured 1l 463ml of lemon juice and 1l 318ml of water into a jug. How much liquid is in the jug?

1l 463ml + 1l 318ml = ☆

Step 1: Add the millilitres (ml).  
Step 2: Add the litres (l).

l	ml
1	463
+	1 318
	2 781

(a)  $\begin{array}{r} 1 \text{ ml} \\ 2630 \\ + 1236 \\ \hline 3866 \end{array}$  (b)  $\begin{array}{r} 1 \text{ ml} \\ 3218 \\ + 2493 \\ \hline 5711 \end{array}$  (c)  $\begin{array}{r} 1 \text{ ml} \\ 2184 \\ + 2361 \\ \hline 4545 \end{array}$  (d)  $\begin{array}{r} 1 \text{ ml} \\ 3405 \\ + 3487 \\ \hline 6892 \end{array}$  (e)  $\begin{array}{r} 1 \text{ ml} \\ 4622 \\ + 3298 \\ \hline 7920 \end{array}$

2. Mikey drank 2l 250ml of water before a hurling match. He drank 1l 283ml of water after the match. How much did he drink altogether?  $3 \text{ l } 533 \text{ ml}$

Lucas poured 2l 519ml of sea water into a bucket. 1l 146ml leaked out through a hole. How much sea water remained in the bucket?

2l 519ml - 1l 146ml = ☆

Step 1: Rename if you must!  
Step 2: Subtract the millilitres (ml).  
Step 3: Subtract the litres (l).

l	ml
2	519
-	1 146
	1 373

3. (a)  $\begin{array}{r} 1 \text{ ml} \\ 4831 \\ - 2418 \\ \hline 2413 \end{array}$  (b)  $\begin{array}{r} 1 \text{ ml} \\ 5827 \\ - 2165 \\ \hline 3662 \end{array}$  (c)  $\begin{array}{r} 1 \text{ ml} \\ 4973 \\ - 1512 \\ \hline 3461 \end{array}$  (d)  $\begin{array}{r} 1 \text{ ml} \\ 7231 \\ - 5170 \\ \hline 2061 \end{array}$  (e)  $\begin{array}{r} 1 \text{ ml} \\ 6584 \\ - 1178 \\ \hline 5406 \end{array}$

4. There was 4l 828ml of water in the sink. If Ciara let 2l 153ml flow down the drain, how much water was left in the sink?  $2 \text{ l } 675 \text{ ml}$

5. How much greater is 7l 826ml than 3l 279ml?  $4 \text{ l } 547 \text{ ml}$


**Challenge** Paudie poured 2l 275ml of milk into a bucket that already contained 3l 350ml. A calf drank 4l 485ml from the bucket. How much milk was left in the bucket?  $1 \text{ l } 140 \text{ ml}$


## Gaeilge


[Listen to Miss Finn agus bí ag scríobh](#)


**E** Bí ag scríobh.

uachtar reoite sa chiseán	ag léamh ag rith	scuab luch	leabhar mishásta	ag ithe ag caint
------------------------------	---------------------	---------------	---------------------	---------------------

1.  Tá \_\_\_\_\_  
Tá \_\_\_\_\_

2.  Tá \_\_\_\_\_  
Tá \_\_\_\_\_

3.  Tá \_\_\_\_\_  
Tá \_\_\_\_\_

4.  Cheannaigh \_\_\_\_\_  
Tá \_\_\_\_\_

1) Tá \_\_\_\_\_

Tá \_\_\_\_\_

2) Tá \_\_\_\_\_

Tá \_\_\_\_\_

3) Tá \_\_\_\_\_

Tá sí \_\_\_\_\_

4) Cheannaigh \_\_\_\_\_

Tá \_\_\_\_\_

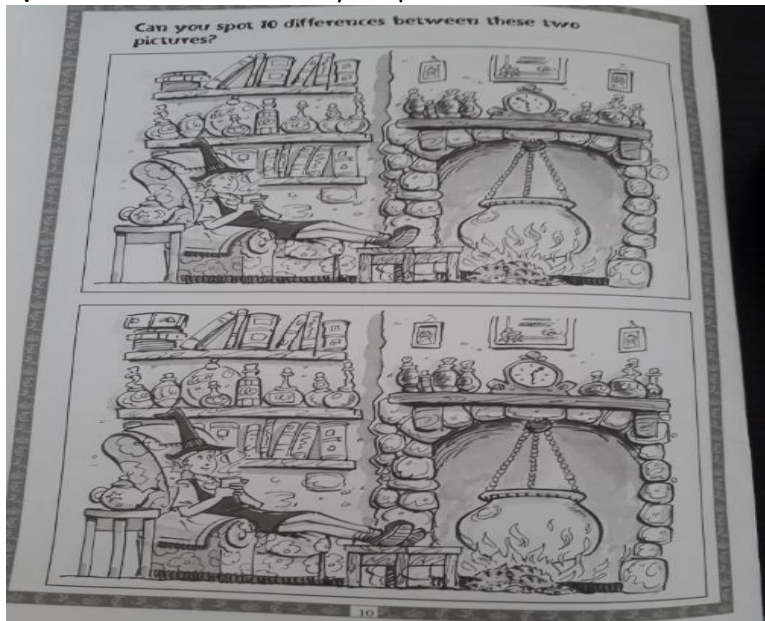
## Friday

- 1. The Yuckee Prince:** Complete reading chapters 3+4.
- 2. Reader's Theatre:** You are a reporter for a big Television News Channel. You are at the gates of Princess Tara's castle as the guests arrive for her birthday party. Begin the report like this:

**Reporter:** Good evening. I am standing here in the Kingdom of Urse with Princess Tara's castle in the background. There is great excitement as a large crowd has gathered to watch the celebrities arrive for the Princess's birthday party. I can just see the first carriage pulling up. I wonder who will get out?

(Hint! You can use fairy tales and nursery rhymes for ideas on some characters)

- 3. Spot the Difference!** Can you spot 10 differences between these two pictures?



- 4. Reado: Choose a Challenge!** Don't forget to fill in the worksheet attached each time you complete a challenge!

## Maths

1. Hit the Button: (online game) Practise  $\times 8$   $\times 9$
2. Busy at Maths Capacity (Problem Solving: Witch's Brew) page 168

Try as many as you can!

(see answers below)

**Capacity - Witch's brew**

Willow is just back from the witch's market. She bought the following ingredients which she will keep in her potion press.

(a) If  $\frac{1}{2}$  l of Squid Ink leaked out of the bottle, how much ink would be left? 250 ml

(b) What is the total capacity of Morning Dew and Snail Slime? 2 l 560 ml

(c) What is the total capacity of Squid Ink and Unicorn Tears? 1 l 950 ml

(d) How much more Dragon's Blood than Snail Slime did she buy? 2 l 190 ml

(e) If Willow already had  $\frac{1}{4}$  l of Puppy Drool, how much Puppy Drool does she have now? 4 l 880 ml ( $\frac{1}{4}$  l = 250 ml)

(f) If she used  $\frac{3}{4}$  the bottle of Puppy Drool in a potion, how much did she have left? 2 l 315 ml ( $\frac{3}{4}$  of 4l 630ml = 3l 472.5ml, 4l 630ml - 3l 472.5ml = 1l 157.5ml, rounded to 2l 315ml)

(g) Willow poured all the Morning Dew and Unicorn Tears into a cauldron. How much less liquid is in the cauldron than in the full bottle of Dragon's Blood? 1 l 350 ml

(h) Willow used half of the Dragon's Blood on Monday. She used another 420 ml on Tuesday. How much is still in the bottle? 505 ml

**Challenge**

How much Dragon's Blood is needed in this potion? 450 ml

Invisibility potion	
Puppy Drool	1l 360ml
Morning Dew	790ml
Dragon's Blood	<u>450</u> ml
<b>Total capacity</b>	<b>2l 600 ml</b>

## Gaeilge

Listen to this well-known Fairy tale and you can read along if you wish. [Click here to listen to Cinnín Óir agus na Trí Bhéar](#)

