



Dear Parents and Girls,

I hope that you and your families are well and that you got a chance to enjoy the good weather we are having. Imagine we only have 2 weeks left!

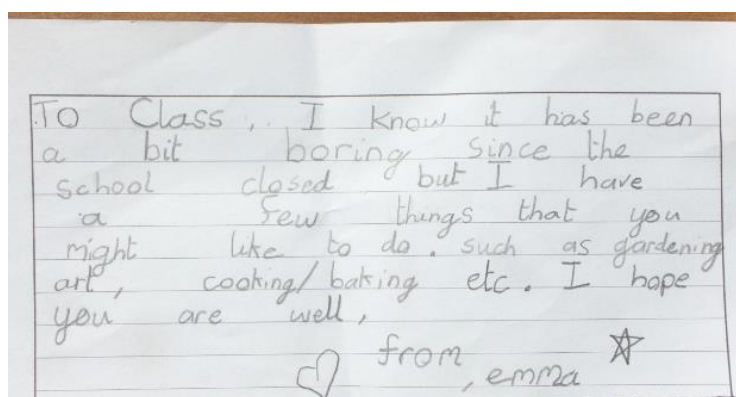
This week you will receive a day on which you must return your Book Rental books. It's that time of year already! Mrs Kelly will be in touch to explain. We are allowing you to keep the Yuckee Prince novels so you can finish them during the holidays. We will collect the novels in September. Also a slight change, we have organised a Fun Friday instead of Fun Wednesday. We hope you will enjoy it!

Thank you all again for your hard work, emails, pictures and more. It has been so great to see how everyone is getting on at home. I hope you all will have a great week and we are here at

3rd@stpatricksgirls.net if we can help with anything.

Miss Lenihan and Miss Finn

Class Letters



Suggested Timetable

9.00-9.30 a.m. Exercise (JoeWicks live (Youtube) / Cosmic Yoga (Youtube)/ Go Noodle website

9.30-10.45 a.m. Work on the Core Subjects (English/Irish/Maths)

10.45-11 a.m. Small Break- Have a healthy snack and go outside for some fresh air!

11-12 noon RTÉ School Hub

12.00-12.45p.m. Project Work

12.45-1pm Lunch
Free Time

We have suggested activities for English, Gaeilge and Maths here.... but all the teachers have worked together to give you other suggestions you could do at home.

[Click here for Boredom Busters](#)

[Week 12 Work June 15th-19th Ms Finn and Ms Linehan's 3rd Classes](#)

[Click here for link to Joe Wicks PE classes](#) [link to Joe Wicks the Body Coach an ideal way to start the day](#)

[Keep up with your times tables here](#) [multiplication practice \(Hit the Button online game\)](#)

[Answer booklet to Work it out](#) [\(answers to WIO\)](#)

[Try to keep a diary daily! It might become famous one day like Anne Frank's diary which she kept during World War 2.](#)

Monday

English

1. **The Yuckee Prince:** Read Chapter 5. You are almost halfway through The Yuckee Prince. Read your Reader's Reports to remind you of the story so far. What part have you enjoyed the most? Write a paragraph about it.

2. **Reado:** Choose a Challenge! Don't forget to fill in the worksheet attached each time you complete a challenge!

Maths

1. **Busy at Maths:** 109 A Quick Look Back 7

(Answers here)

A quick look back 7

1. $\frac{1}{4}$ of a number is 6. What is the whole number? **48**

2. How many times can I take 6 from 66? **11**

3. What time does this clock show? **20 to 2**

4. This clock shows **5 to 7**

5. By how much is 660 greater than 340? **320**

6. A ladybird has 6 spots. How many spots have 7 ladybirds? **42**

7. $63 \div 9 =$ **7**

8. Draw 2 lines of symmetry on this shape.

9. Add **€3.30** to **€1.25** **€4.55**

10. Which of these boxes of apples can be packed in trays of 4 or 8 leaving no apples left over? **C**

11. Write the time shown on this clock in digital form. **11:29**

12. Write the time shown on this clock in digital form. **3:50**

13. Write $\frac{1}{4}$ as units and fractions. **$4 \times \frac{1}{4}$**

14. Put the correct sign ($<$, $=$ or $>$) in the $\frac{1}{3}$ of 24 **$<$** $\frac{1}{6}$ of 70

15. $8 \times 9 =$ **72**

16. $\frac{1}{10}$ of a set = 5. The whole set = **50**

17. $\frac{1}{8}$ of the 64 children in a school have green eyes. How many children have green eyes? **8**

18. It is now **3:40**. Philip wants to get the **3:35** bus. How long has he to wait? **25** minutes

19. A television programme started at **4:50**. It lasted for 35 minutes. It finished at **5:25**

20. Samir arrived for a party at **2:25** instead of **3:00**. How many minutes too early was he? **35** minutes

10 \times 4
5 \times 6

2. **Hit the Button** (online games) Practise $\times 3 \times 4$

Gaeilge

Éist le Cúla4 An bia is fearr leat?

Cén sort bia is fearr leat? (What is your favourite food?)

Is fearr liom...I prefer

Is maith liom....I like

Is breá liom....I love

Tuesday

English

1. The Yuckee Prince: Read Chapter 6. Continue with your Reader's Report Journal (diary). Write a summary (3 important pieces of information) and a prediction of what you think is going to happen in the next chapter.

Challenge (optional): Reader's Theatre

Wendy phones Hazel while the Yuckee Prince is eating his breakfast. What advice would Hazel give to Wendy about babysitting a prince? Write the telephone conversation (ideally with a partner at home). Begin like this.

Hazel: (picking up ringing phone) Hello!

Wendy: Hello Hazel. It's Wendy here. Guess what!

Hazel: What?

Wendy: I've got my first job. Isn't it great! I'm babysitting a prince.

Hazel: Congratulations! Is everything going all right?

2. **Reado:** Choose a Challenge! Don't forget to fill in the worksheet attached each time you complete a challenge!

Gaeilge

Éist le Cúla 4 Bia Linn: Seacláid!

Jot down words/phrases you recognise! I'll start you off

Seacláid=chocolate!!!

Maths

1. **Busy at Maths:** page 143 A quick look back 9

Answers below

2. **Hit the Button:** (online game) Practise $\times 6$ $\times 7$

The image shows a student's completed worksheet from page 143 of a math book. The worksheet contains 20 numbered problems with handwritten answers and calculations. The problems cover various topics including multiplication, division, addition, subtraction, and unit conversion. The student has used various methods like drawing, clocks, and number lines to solve the problems.

1. The steps in this ladder are parallel to each other.

2. What kind of an angle do the hands of a clock make when it is 3 o'clock? a right angle

3. Paul has 6 marbles. Pablo has 2 times that number. How many has Pablo? 12

4. Jeanne shared 77 crayons equally among 7 children. Each child got 11 crayons.

5. Which of these capital letters has diagonal lines? H E L K T K

6. How many 7-a-side teams can be made from 56 players? 8

7. $387 \times 1 =$ 387

8. $18 \times 10 =$ 180

9. Write $13 \frac{7}{10}$ as a decimal number. 13.7

10. $16 \times 12 = (16 \times 10) + (16 \times 2) =$ 192

11. $26 \times 14 = (26 \times 10) + (26 \times 4) =$ 364

12. There are 70 apples in a box. How many apples are there in 7 boxes? 490

13. Jeremy buys 18 litres of petrol each week. How many litres of petrol does he buy in 10 weeks? 180

14. A paint tray holds 5 pots. Carrie filled as many trays as she could from the 34 pots that she had. How many pots were left? 4

15. Add 3 units to this decimal number: 15.8

16. Paula had €5. She spent €3.65. She had € 1.35 left.

17. Write the biggest decimal number. (a) 46.8 (b) 68.4 (c) 48.6 (d) 64.8

18. By how many centimetres is 6m 24cm less than 7m? 76 cm

19. Betty needs 50 balloons for a party. They come in packets of 6. How many packets must she buy to have enough balloons? 9

20. Kathy had 36 grapes. She ate 7 and divided the rest equally among her 4 friends. Each friend got 8 grapes.

Wednesday

English

1. The Yuckee Prince: Reading Chapter 7. Continue with your Reader's Report Journal (diary). Write a summary (3 important pieces of information) and a prediction of what you think is going to happen in the next chapter.

Challenge (optional): Draw Before and After pictures of Wendy's garden. Before and after the Yuckee Prince that is!

3. Reado: Choose a Challenge! Don't forget to fill in the worksheet attached each time you complete a challenge!








Maths

1. Hit the Button: (online game) Practise $\times 8 \times 9$

2. Busy at Maths: page 160 A quick look back 10

(Answers here)

A quick look back 10

- Write 980c as euro using the € sign.
€9.80
- Vera spent €8.40 in a shop. What change had she from €10? € 1.20
- I had €5.80. I got  from my sister. How much money had I then? € 6.60
- A net of oranges costs €4. How much would 9 nets of oranges cost? € 36
 $9 \times €4$
- What number is 340 less than 670?
330
- Write the next number in this pattern.
 795
- Put the correct sign in the \bigcirc .
 $105 \bigcirc + 38 = 143$
- What sign goes in \bigcirc ?
 $72 \bigcirc 8 = 9$
- What date comes just after 30th April?
1st of May
- How many hours and minutes are there from 2:45 to 5:00?
2 hours 15 minutes
- How many grammes are there in 1kg?
1000 grammes
- $\frac{1}{4}$ kg = 250 grammes
-  500g of sugar cost €1. How much would $2\frac{1}{2}$ kg cost? € 5
 $500g = \frac{1}{2} kg$
- Joel needs 75 balloons for a party. They come in packs of 9. How many packs must he buy to have enough balloons? 9 packs
- $(7 \times 8) + 6 =$ 62
- The train leaves at 3:25. It is now . How many minutes to go before the train leaves? 100 minutes 
- $(72 \div 9) + 23 =$ 31
-  How many bags of 9 apples can be filled from 69 apples and how many apples will be left over?
7 bags and 6 left over
- Write $94\frac{9}{10}$ as a decimal number.
94.9
- Jerry has €16.65. If he had €7.35 more, he would have enough to buy the coat. The coat costs €24.00 

Gaeilge

Éist le Kate Ruiséal Cúla4Weather Competition Winner

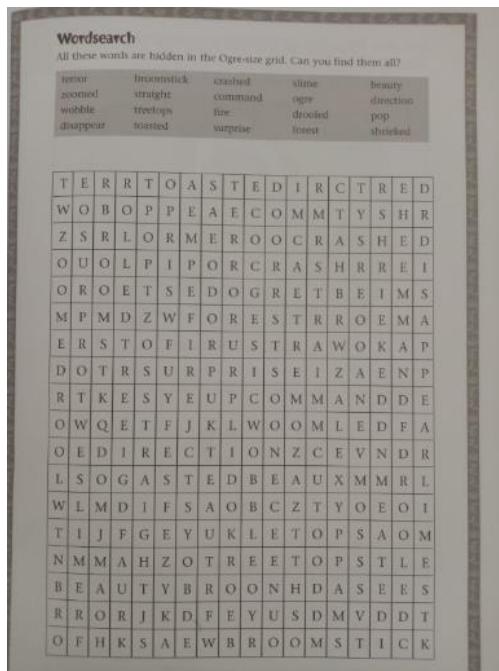
Jot down some words or phrases you recognise!

Thursday

1. The Yuckee Prince: Read chapter 8. Continue with your Reader's Report Journal (diary). Write a summary (3 important pieces of information) and a prediction of what you think is going to happen in the next chapter.

Challenge (optional): 1. Chapter Eight does not have a title. Think about a good name for this chapter. Give reasons for your choice!

2. Print this Wordsearch. Can you find all the words?



2. Reado: Choose a Challenge! Don't forget to fill in the worksheet attached each time you complete a challenge!

Maths

- Hit the Button:** (online game) Practise $\times 9$ $\times 10$. Try playing also Bonds to 100.

Gaeilge

[Click here to listen to Little Red Riding Hood as Gaeilge](#) as told by a Fifth Class.

Can you do a Fishtail plait?

[Listen to 'An Gúrú Gruaige'](#) and give it a try!

Fun Friday

Summer Challenge

Can you make a piece of grass whistle? Look at the instructions below and see can you do it! Best of luck!!



Science Experiment

Did you watch the astronauts going to the International Space Station? You could try to make your own rocket!

Mini Bottle Rocket

SCIENCE
SPARKS



You'll need:

Small 500ml bottle - empty

Cork which fits tightly inside the bottle neck

Half a piece of kitchen roll

1 tablespoon baking soda - bicarbonate of soda

Vinegar or lemon juice

3 Straws

Tape



Instructions

Use the tape to attach the 3 straws to the side of the bottle so it stands up, upside down.

Pour about 2 cm of vinegar into the bottle.

Wrap the baking soda up in the kitchen roll to make a little parcel.

Choose a launch site outside. It needs to be on a hard surface.

When you're ready to launch, drop the baking soda parcel into the bottle, quickly add the cork, put the rocket down and stand back!

Warning - make sure you have a clear empty space and keep observers well back from the launch site as the rocket shoots up very quickly.



See can you try this simple activity at home.

[Grow your own rainbow Click here](#)



Poetry

Have fun with Bobby Bippy, It's a tough tongue twister!!

<p>I DON'T KNOW WHAT TO DO TODAY</p> <p>I don't know what to do today, Perhaps I'll go outside and play, or stay indoors and watch TV, or take a bath, or climb a tree.</p> <p>Or maybe I'll go ride my bike, or pick my nose, or take a hike, or jump a rope, or scratch my head, or play a game, or stay in bed, or dance a jig, or pet the cat, or drink some milk, or buy a hat, or sing a song, or read a book,</p> <p>or change my socks, or learn to cook, or dig a hole, or eat a pear, or call my friends, or brush my hair, or hold my breath, or have a race, or stand around and slap my face.</p> <p>I'm so confused, and bored, and blue, to not know what I ought to do. I guess that I should just ask you. So, what do you think I should do?</p> <p style="text-align: right;">Kenn Nesbitt</p>	<p>Bobby Bippy bought a bat. Bobby Bippy bought a ball. With his bat Bob banged the ball Banged it bump against the wall But so boldly Bobby banged it That he burst his rubber ball ""Boo!"" cried Bobby Bad luck ball Bad luck Bobby, bad luck ball Now to drown his many troubles Bobby Bippy's blowing bubbles.</p>
--	--

Folk Tales from Ulster



One of Ireland's most beautiful tourist attractions is the Giant's Causeway. It is located on the coast of Antrim. Have a listen to the folk tale of Fionn and the Giant's Causeway.

[Click here to hear the story of Fionn and the Giant's Causeway](#)

Join this TG4 Artist and see can you draw along with him as he teaches the presenter how to draw a zombie!

[Click here to learn how to draw a zombie](#)



Music Ideas

Did you see Mary Poppins when it was in the cinema? Or when 4th class sang it in Cór Fhéile. One of the most famous songs from the film was Supercalifragilisticexpialidocious!



See can you sing along with this version of the song. See how fast you can sing it!

[Click here to sing Supercalifragilisticexpialidocious!](#)